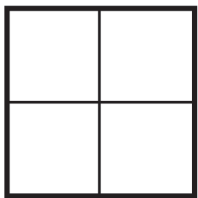



Shape Fractions

Name: _____

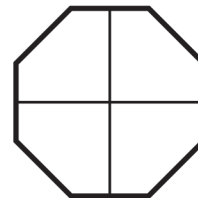
INSTRUCTIONS: Color the shape to correctly represent the fraction specified.



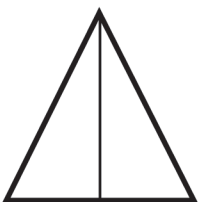
$$\frac{1}{4}$$



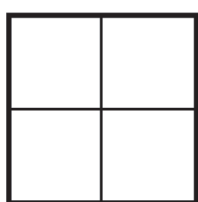
$$\frac{3}{4}$$



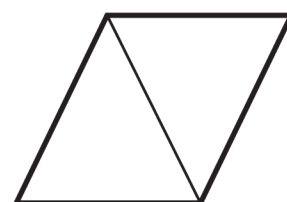
$$\frac{3}{4}$$




$$\frac{1}{2}$$



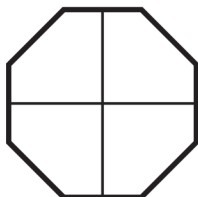
$$\frac{3}{4}$$



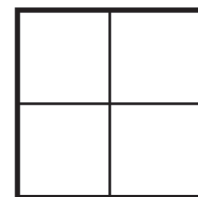
$$\frac{1}{2}$$



$$\frac{6}{8}$$



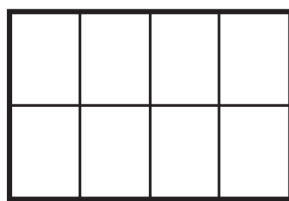
$$\frac{1}{4}$$



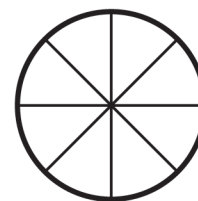
$$\frac{2}{4}$$



$$\frac{2}{2}$$



$$\frac{4}{8}$$



$$\frac{2}{8}$$

